


TANGENT EARLY YEARS' ASSESSMENT
MONITORING LEARNER'S PROGRESS
GRADE 4 - YEAR 2020
HOME SCIENCE, ART & CRAFT AND MUSIC



Name: _____

Gender Boy Girl

School name: _____

TEACHER'S SCORING GUIDE
SECTION A
ASSESSMENT RUBRICS


Exceeds Expectations	Meets Expectations	Approaches Expectations	Below Expectations

SECTION B


The grid below is to be filled by the teacher after marking the learner's work.

Learning areas	Home science	Art and craft	Music
No. of questions correct			
Performance level			

1. Name the following food stuffs
(5 marks)



2. Identify the houses in each picture
(4 marks)



3. Name five needs of a child for healthy development (5 marks)

- a) _____
- b) _____
- c) _____
- d) _____
- e) _____

4. Name any two different games played in your locality (2 marks)

- a) _____
- b) _____

5. A ball is fit for playing _____
(football, hide and seek)

6. Write true or false (4 marks)



a) We should drink clean water

b) We should not play near fire

c) We should eat washed apples


d) Girls use urinals _____


7. Identify the common illness in these pictures (4 marks)





8. Identify these clothing (5 marks)





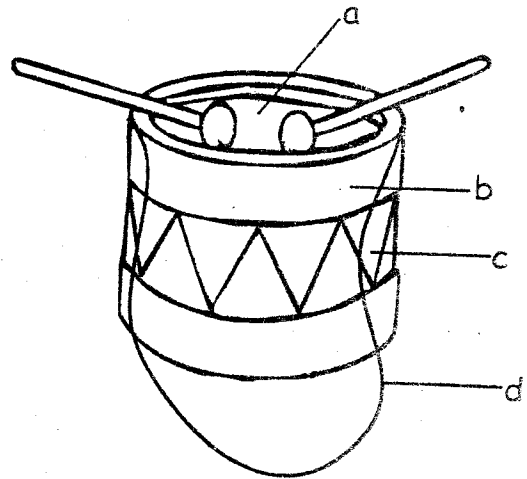






MUSIC ACTIVITIES.

9. Name the parts of this musical instrument. (4 marks)



a) _____

b) _____

c) _____

d) _____

(sling, sound box, skin membrane, tuning lace)

10. Name any five words found in the national anthem. (5 marks)

a) _____


b) _____

c) _____

d) _____

e) _____

11. Identify this musical instrument. _____



(guitar, piano)

CREATIVE ARTS.

12. Name four things we use in drawing

(4 marks)

- a) _____
- b) _____
- c) _____
- d) _____

13. Colour these pictures

(6 marks)

