


COMPETENCY BASED CURRICULUM

GRADE 4 -YEAR 2020

MATHEMATICAL ACTIVITIES



Time : 2 Hours

Name _____

Learners Number

Gender Boy Girl

County Name _____ County code

Sub -County Name _____ Sub-county code

School Name _____ School code

TEACHER'S SCORING GUIDE

The teacher to fill the grid below after marking the learner's work.

	Exceeds expectation	Meets expectation	Approaching expectation	Below expectation
Numbers (1-20)				
Measurement (21 - 27)				
Geometry (28-33)				

NUMBERS

1. $127 + 292 =$ _____

2.
$$\begin{array}{r} 727 \\ -251 \\ \hline \\ \hline \end{array}$$

3. Write three thousand two hundred and thirty three in figures.

4. Which number comes before 999

5. **Add**

$1465 + 2376 + 311 =$ _____

6. Write eleventh as a fraction

7. Subtract 9 from 304

8. Write the next even number

0, 2, 4, 6, _____

9. $6x$ _____ $= 24$

10. Write $\frac{3}{10}$ in words

11. What is half of ten

12. What is the place value of digit 4 in 574 = _____

13. $3 \overline{)243}$

14. **Multiply**

$25 \times 12 =$ _____

15. Which of these numbers is an odd one

(46, 38, 21, 44)

16. What is the next number

30, 28, 26, 24, _____

17. $3 \overline{)35}$

18. 8 multiplied by 6 is

19. $\frac{2}{5} + \frac{1}{5} + \frac{1}{5} =$ _____


20. $27 \div$ _____ $= 9$

MEASUREMENTS

21. m	cm
23	45
+32	22
<hr/>	
<hr/>	

22. Sh	cts
52	65
+13	30
<hr/>	
<hr/>	

23. What is the time



24. Weeks days

5	3
-2	6
<hr/>	
<hr/>	

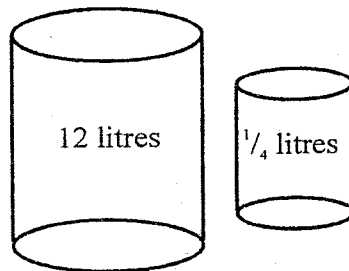
25. Work out

45L + 38L = _____

26. Work out

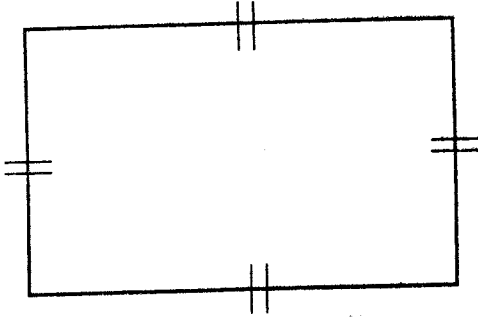
364
-149
<hr/>
<hr/>

27. How many small tins can fill the big one completely

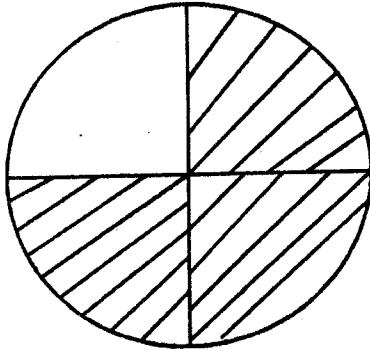


GEOMETRY

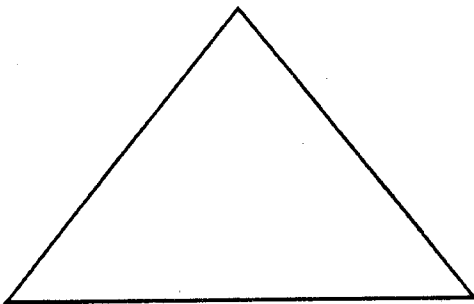
28. Name the figure below



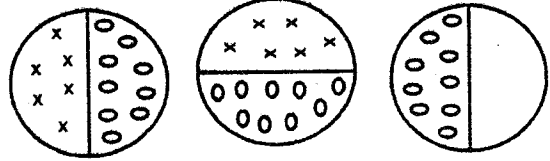
29. What fraction is unshaded




30. The shape below has how many sides



31. Which is the next pattern



32. How many small squares are there



33. There are _____ centimeters in 1 metre.